


Perimeter of a Vegetable Patch

Find the perimeter of the vegetable patches below. Don't forget to find the perimeter you add up all the sides!


1.



What is the perimeter of the carrot patch? Show your work!

Answer: _____

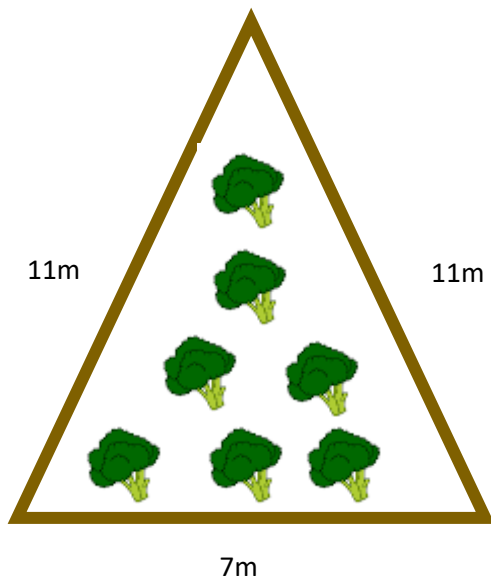
2.



What is the perimeter of the strawberry patch? Show your work!

Answer: _____

3.



What is the perimeter of the broccoli patch? Show your work!

Answer: _____



Perimeter of a Vegetable Patch



3. 29m
2. 30m
1. 24m

Answers: