



Measuring Maths

Colour in the jugs up to the amount's below.



900ml



200ml



500ml

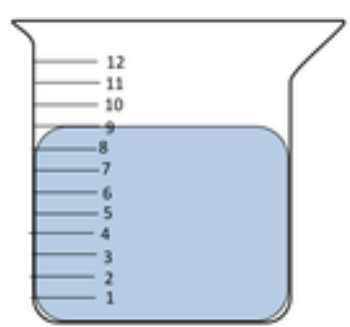
Fill in the answer's below:

400ml + 200ml = _____

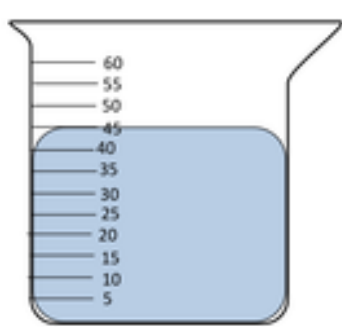
300ml + 100ml = _____

650ml + 50ml = _____

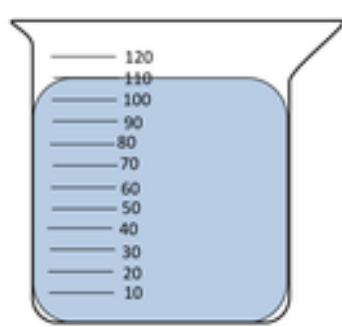
Can you write down the amount of water in each jug?



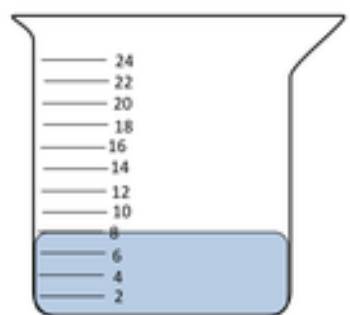
_____ ml



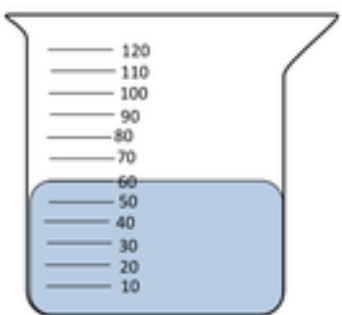
_____ ml



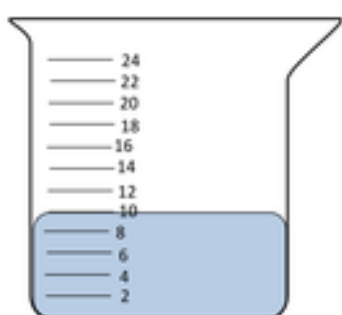
_____ ml



_____ ml



_____ ml



_____ ml