


Area of a Garden

Find the area of the farms below! Don't forget! Area = Width x Height

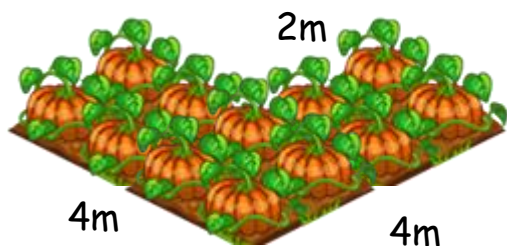
A.



What is the area of the cauliflower patch? Show your work!

Area = _____


B.



What is the area of the pumpkin patch? Show your work!

Area = _____

C.



What is the area of the onion patch? Show your work!

Area = _____

D.



What is the area of the entire property (house and garden)? Show your work!

Area = _____



Area of a Garden



$$D = 84\text{m}$$

$$C = 54\text{m}$$

$$B = 12\text{m}$$

$$A = 16\text{m}$$

Answers: